

2022 national curriculum tests

Key stage 2

Mathematics

Paper 3: reasoning

First name						
Middle name						
Last name						
Date of birth	Day		Month		Year	
School name						
DfE number						

[BLANK PAGE]

Please do not write on this page.

Instructions

You **must not** use a calculator to answer any questions in this test.

Questions and answers

You have **40 minutes** to complete this test.

Follow the instructions for each question.

Work as quickly and as carefully as you can.

If you need to do working out, you can use the space around the question.

Do not write over any barcodes.

Some questions have a method box like this:

For these questions, you may get a mark for showing your method.

If you cannot do a question, **go on to the next one**.

You can come back to it later, if you have time.

If you finish before the end, **go back and check your work**.

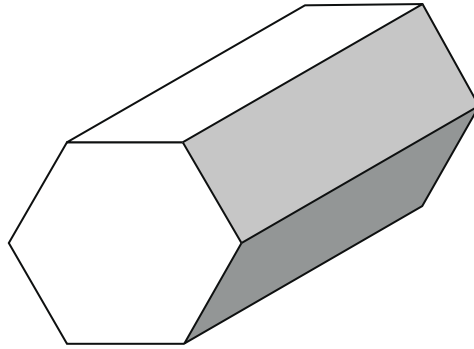
Marks

The number under each line at the side of the page tells you the number of marks available for each question.



1

Here is a drawing of a hexagonal prism.

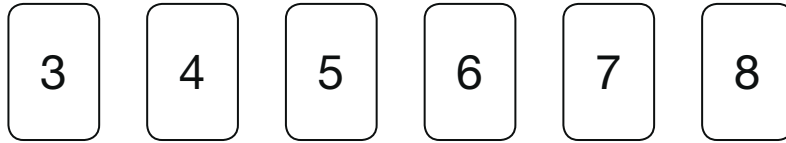


How many **faces** does the prism have?

1 mark

2

Here are six number cards.



Use **all six** cards to complete the three multiplications below.

$$24 = \square \times \square$$

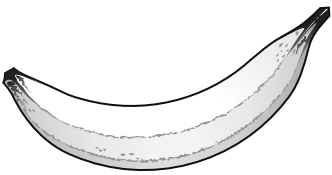
$$28 = \square \times \square$$

$$30 = \square \times \square$$

1 mark

3

Olivia buys a banana, an apple and a bag of nuts.



30p



45p



60p

She pays with three 50p coins.

What is her change?

Show your method

p

2 marks



4

Draw **four** lines to match each fraction to its equivalent decimal.

$$\frac{1}{2}$$

$$\frac{3}{10}$$

$$\frac{3}{4}$$

$$\frac{3}{100}$$

0.3

0.5

0.8

0.03

0.25

0.75

2 marks

5

Some children vote for their favourite ice-cream flavour.

Ice-cream flavour	Number of children
vanilla	87
chocolate	154
strawberry	?
mint	38
Total	402

How many children vote for **strawberry**?

Show your method

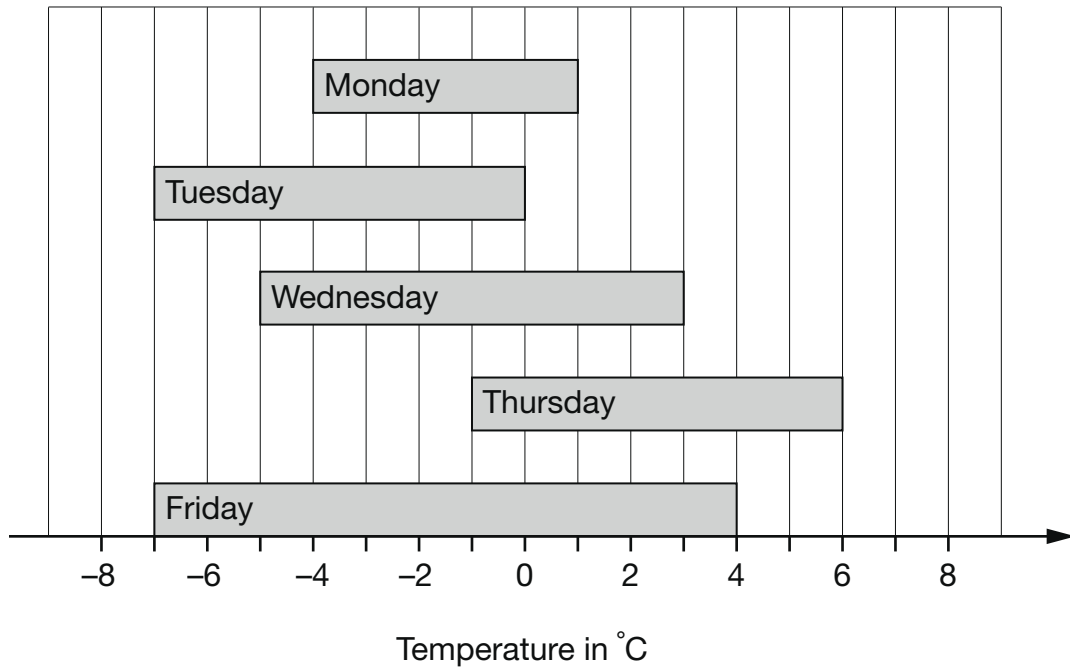
A large grid for showing the method. A small box labeled "children" is placed on the grid.

2 marks



6

This chart shows the range of temperatures each day during one week from Monday to Friday.



What was the **lowest** temperature?

1 mark

What was the difference between the highest and lowest temperatures on **Wednesday**?

1 mark



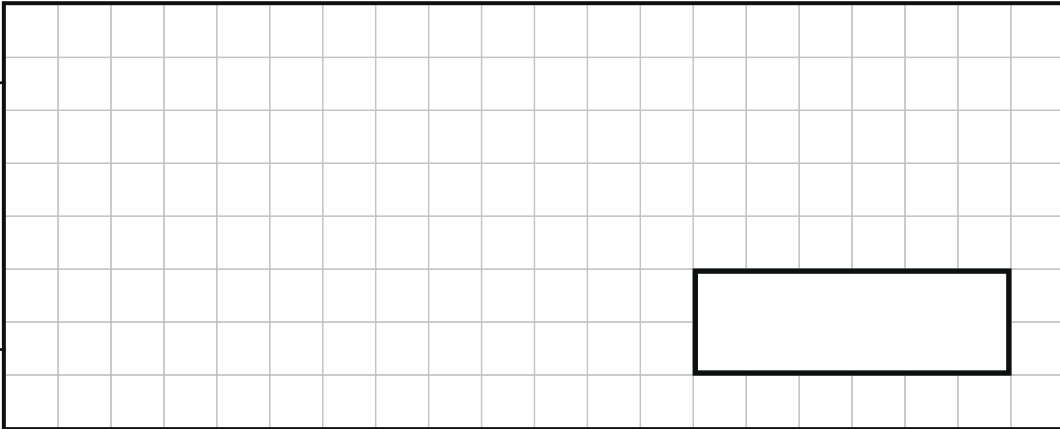
7

One Saturday afternoon, a total of 234,869 people attended three rugby matches.

- 80,978 people attended match 1
- 72,319 people attended match 2

How many people attended match 3?

Show
your
method



2 marks

8

7,546

Round this number:

to the nearest 1,000

to the nearest 100

to the nearest 10

2 marks

9

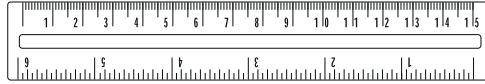
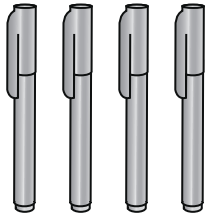
Complete the calculation.

$$1,000 \times 416 = 10 \times$$

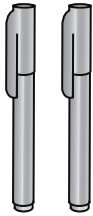
1 mark

10

Adam buys 4 pens and a ruler and pays £4.75 altogether.

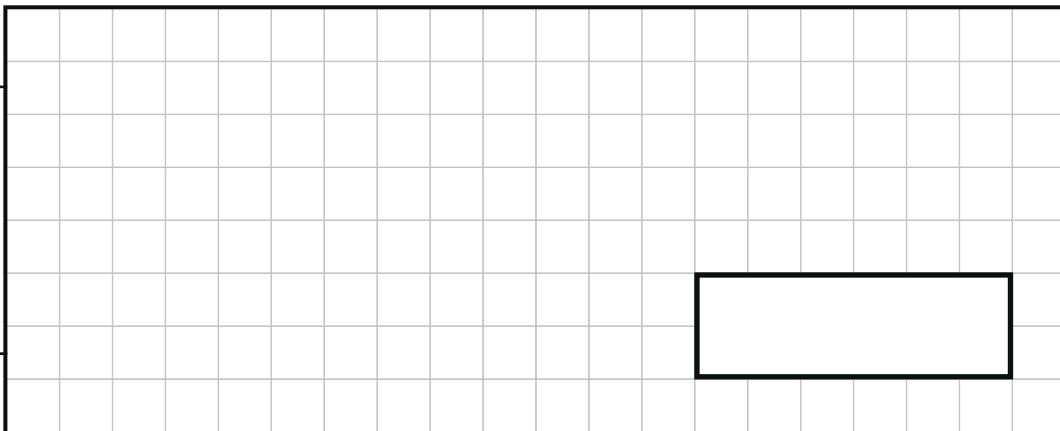


Jack buys 2 pens and pays £1.98 altogether.



How much does a **ruler** cost?

Show
your
method



2 marks

11

Ally chooses a whole number.

When she multiplies her number by **4**, the answer is **less than 100**

When she multiplies her number by **5**, the answer is **greater than 100**

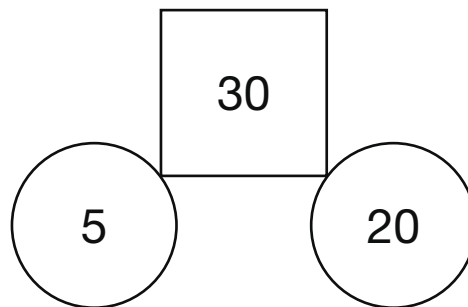

Write a number that Ally could have started with.

1 mark

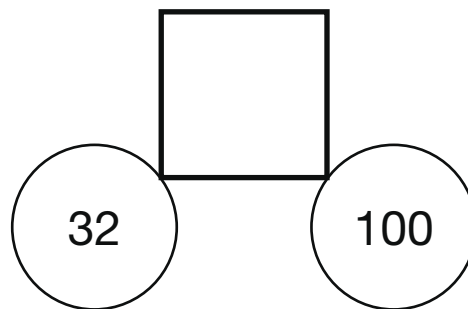
12

William says the rule for this diagram.

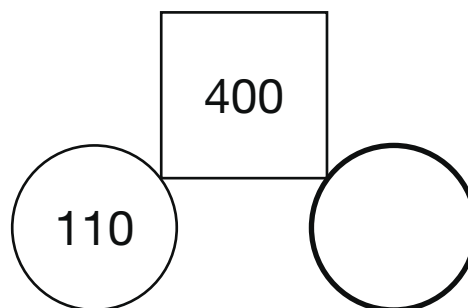
Find the difference between the numbers in the circles.
Double this to make the number in the square.



Use the same rule to write the missing numbers below.



1 mark



1 mark

13

Write the missing fraction to make this **addition** correct.

$$\frac{2}{3} + \boxed{\phantom{\frac{1}{6}}} = \frac{5}{6}$$

1 mark

14

Jack hires a hall for a party.

This formula is used to work out the total cost.

Total cost = £15 booking fee + £12.50 per hour

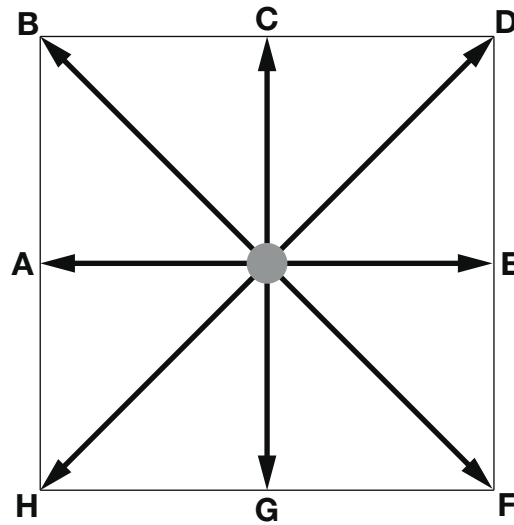
What is the total cost of hiring the hall from 6 pm until 11 pm?

£

1 mark

15

Stefan stands in the centre of this square.



Not actual size

Stefan is facing towards **F**.

He turns **anti-clockwise** to face **D**.

What **angle** does Stefan turn through?

degrees

1 mark

Stefan is now facing towards **D**.

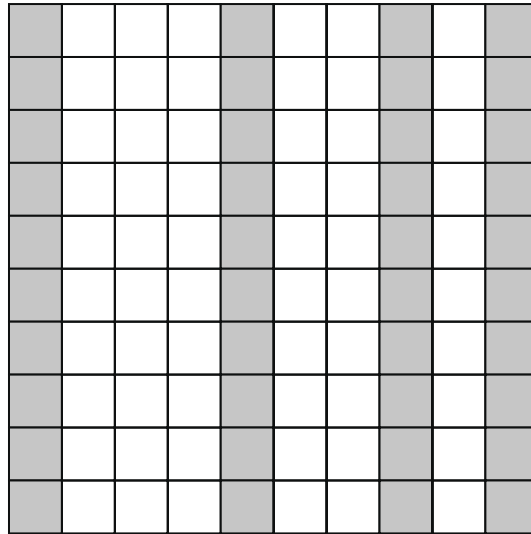
He turns **3 right angles clockwise**.

Write the **letter** he faces after the turn.

1 mark

16

Part of this 10×10 grid is shaded.



Tick the fractions that represent the shaded part of the grid.

$\frac{1}{4}$

$\frac{2}{5}$

$\frac{4}{10}$

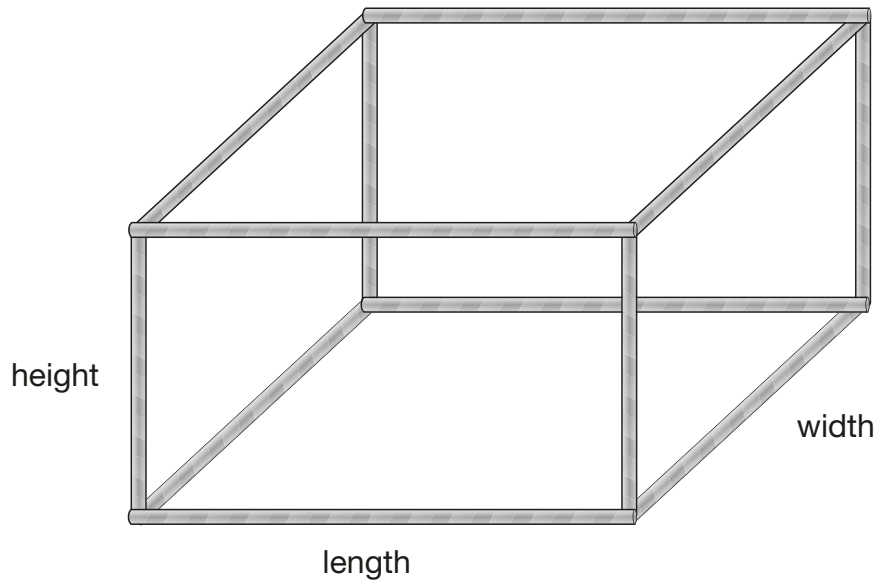
$\frac{6}{10}$

$\frac{40}{100}$

2 marks

17

Kim makes a cuboid model using straws.



She uses straws that are 7.5 cm long for the height.

She uses straws that are 11 cm long for the length.

She uses straws that are 8.5 cm long for the width.

What is the **total** length of all the straws in her model?

Show
your
method

2 marks

19

Jack says,

When you square a prime number, the answer has only two factors.



Explain why Jack is **not** correct.

A large, empty, cloud-shaped box with a scalloped border, intended for the student to write their explanation.

1 mark

20

This table shows how many people finished the New York Marathon in each of the first four decades it was held.

New York Marathon	
Decade	Total number of people who finished
1st decade	24,863
2nd decade	170,932
3rd decade	282,420
4th decade	350,824

What is the mean number of people who finished the marathon per decade? Round your answer to the **nearest hundred**.

Show your method

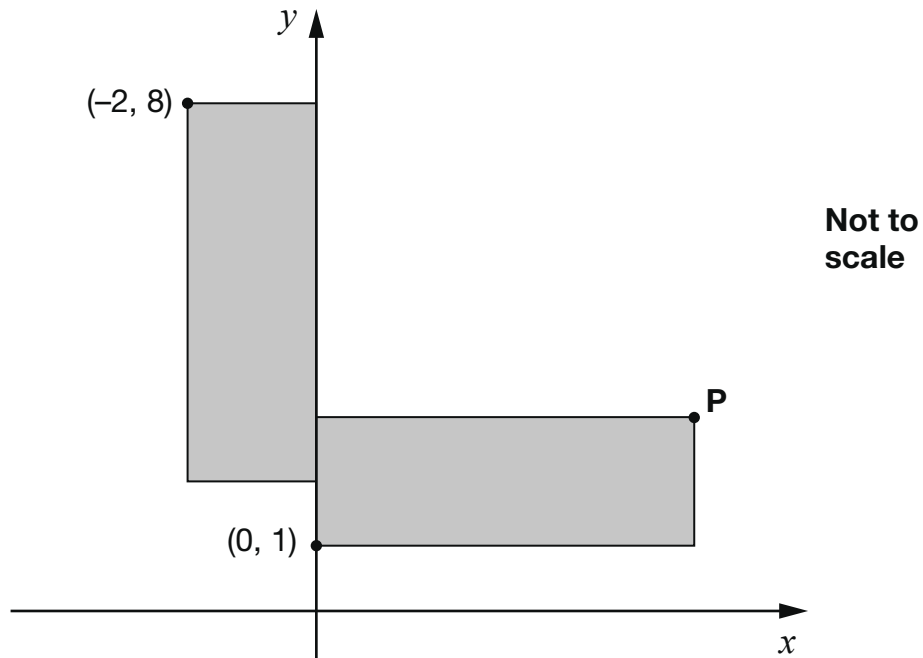
people

3 marks

21

These two rectangles are identical.

The length of each rectangle is **three times** its width.



What are the coordinates of point **P**?

1 mark

[END OF TEST]

Please do not write on this page.





2022 key stage 2 mathematics

Paper 3: reasoning

Print version product code: STA/22/8419/p ISBN: 978-1-78957-267-4

Electronic PDF version product code: STA/22/8419/e ISBN: 978-1-78957-288-9

For more copies

Additional copies of this book are not available during the test window.

They can be downloaded afterwards from

<https://www.gov.uk/government/collections/national-curriculum-assessments-practice-materials>.

© Crown copyright 2022

Re-use of Crown copyright in test materials

Subject to the exceptions listed below, the test materials on this website are Crown copyright and you may re-use them (not including logos) free of charge in any format or medium in accordance with the terms of the Open Government Licence v3.0 which can be found on the National Archives website and accessed via the following link: www.nationalarchives.gov.uk/doc/open-government-licence. When you use this information under the Open Government Licence v3.0, you should include the following attribution: 'Contains material developed by the Standards and Testing Agency for 2022 national curriculum assessments and licensed under Open Government Licence v3.0' and where possible provide a link to the licence.



Exceptions – third-party copyright content in test materials

You must obtain permission from the relevant copyright owners, as listed in the '2022 key stage 2 tests copyright report', for re-use of any third-party copyright content which we have identified in the test materials, as listed below. Alternatively, you should remove the unlicensed third-party copyright content and/or replace it with appropriately licensed material.

Third-party content

These materials contain no third-party copyright content.

If you have any queries regarding these test materials, contact the national curriculum assessments helpline on 0300 303 3013 or email assessments@education.gov.uk.

